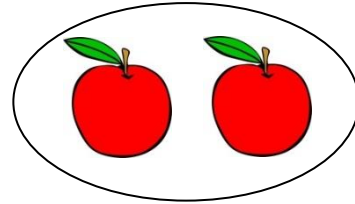






МНОЖЕЊЕ

1. Ког воћа има више?






Поморанци има $___ \cdot ___ = ___$

Јабука има $___ \cdot ___ = ___$

Више има _____.

2. Којих животиња има најмање?



Риба има $___ \cdot ___ = ___$

Сова има $___ \cdot ___ = ___$

Сеница има $___ \cdot ___ = ___$

Најмање има _____.

3. Прецртај оно што није тачно.

$2 \cdot 3 = 6 \cdot 1$

$8 \cdot 3 = 2 \cdot 9$

$4 \cdot 7 = 2 \cdot 10$

$9 \cdot 1 = 3 \cdot 3$

$5 \cdot 4 = 6 \cdot 3$

$5 \cdot 8 = 4 \cdot 10$

$5 \cdot 2 = 1 \cdot 10$

$4 \cdot 9 = 5 \cdot 7$